

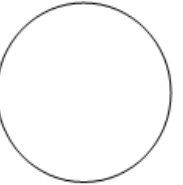
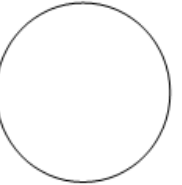
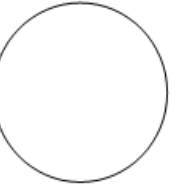
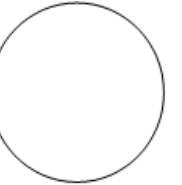
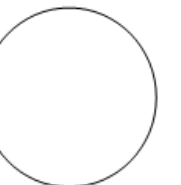
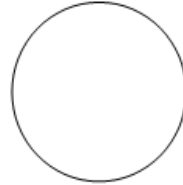
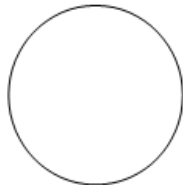



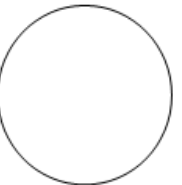

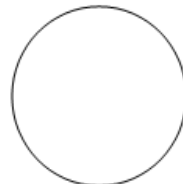
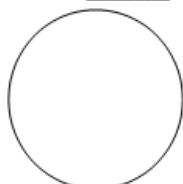
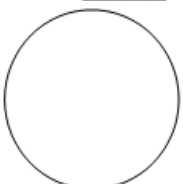

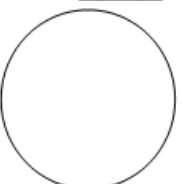

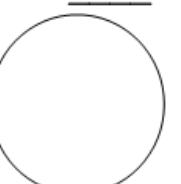
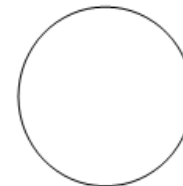
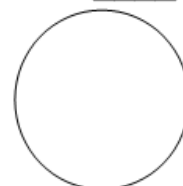
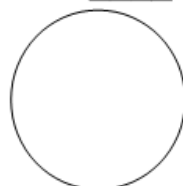
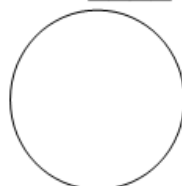


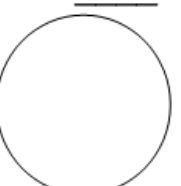


Name _____

Moon Calendar

Draw the part of the moon that you can see, shading in the part that you cannot.

Day 1 Date _____ 	Day 2 Date _____ 	Day 3 Date _____ 	Day 4 Date _____ 	Day 5 Date _____ 	Day 6 Date _____ 	Day 7 Date _____ 
Day 8 Date _____ 	Day 9 Date _____ 	Day 10 Date _____ 	Day 11 Date _____ 	Day 12 Date _____ 	Day 13 Date _____ 	Day 14 Date _____ 
Day 15 Date _____ 	Day 16 Date _____ 	Day 17 Date _____ 	Day 18 Date _____ 	Day 19 Date _____ 	Day 20 Date _____ 	Day 21 Date _____ 
Day 22 Date _____ 	Day 23 Date _____ 	Day 24 Date _____ 	Day 25 Date _____ 	Day 26 Date _____ 	Day 27 Date _____ 	Day 28 Date _____ 

Approximate the dates for each of the phases of the moon.

New Moon	
Waxing Crescent	
First Quarter	
Waxing Gibbous	
Full Moon	
Waning Gibbous	
Third Quarter	
Waning Crescent	