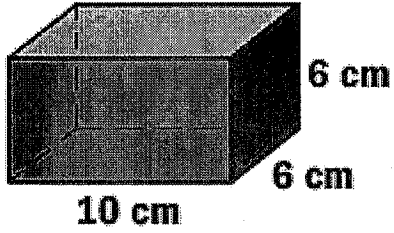




3.



Draw and label the net for the figure to the left.

Rectangle –

Rectangle –

Rectangle –

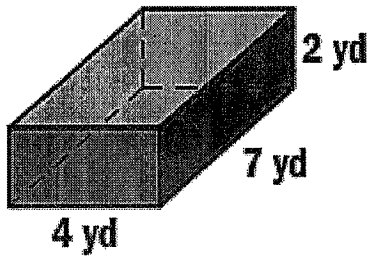
Rectangle –

Rectangle –

Rectangle –

Surface Area –

4.



Draw and label the net for the figure to the left.

Rectangle –

Rectangle –

Rectangle –

Rectangle –

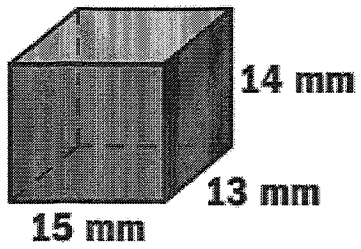
Rectangle –

Rectangle –

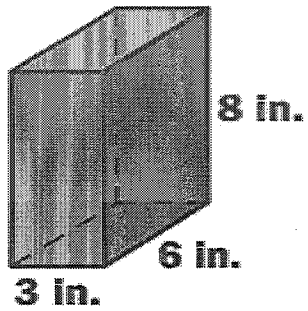
Surface Area –

Find the surface area for each of the following figures.

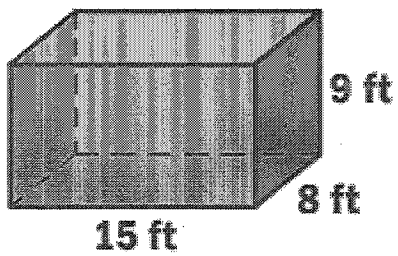
5.



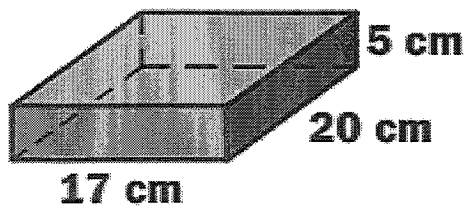
6.



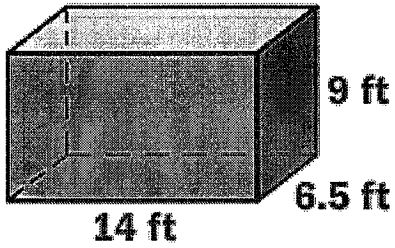
7.



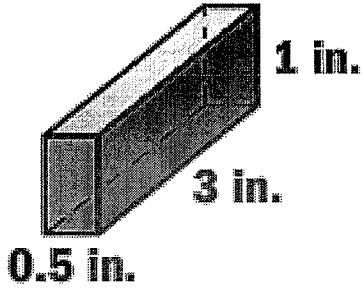
8.



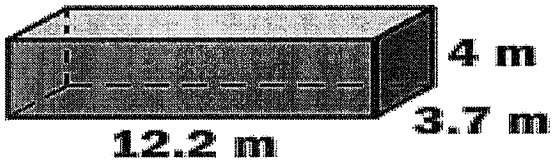
9.



10.



11.



12

You are building a storage box out of plywood using the dimensions shown. Plywood costs \$1.50 per square foot. Find the total cost of the plywood.

